



# Minuwangoda Zonal Education

## Second Term Evaluation - 2024

Grade 7

Geography

Name: .....

Time ; - 2 hours

### Part I

❖ Write correct answers on the dotted line. From the question number 1 - 5.

- 1) The 0° latitude is indicated by .....
  - i. Tropic of cancer
  - ii. Equator
  - iii. Greenwich Meridian line
  - iv. International date line
- 2) The smallest continent in the world is,
  - i. Pacific Ocean
  - ii. Atlantic Ocean
  - iii. Artic Ocean
  - iv. Indian Ocean
- 3) There are ..... continents in the world.
  - i. 7
  - ii. 5
  - iii. 3
  - iv. 8
- 4) The climatic zone between 30m -300m from the sea level is known as .....
  - i. Central hills
  - ii. Coastal plain
  - iii. Wet zone
  - iv. Intermediate zone
- 5) ..... is belonged to Sri Lankan territorial sea limits.
  - i. 12 N.M
  - ii. 24 N.M
  - iii. 200 N.M
  - iv. 20 N.M

❖ If the statement is correct put (✓) mark and wrong (X) mark. From the question number 6 - 10.

- 6) Dry zone and wet zone is separated by river Kalani in Sri Lanka. ( )
- 7) Sinharaja forest is a tangible heritage. ( )
- 8) Mangroves are seen in arid zone. ( )
- 9) The lines drawn from south to east on the globe is known as longitudes. ( )
- 10) The literacy level of Sri Lanka is 92%. ( )

❖ **Write the correct answer on the dotted lines form the question number 11 - 15**

- 11)..... is a large land area surrounded by water.
- 12)The ..... Tree is usefull tree who are living in Jaffna peninsula.
- 13)After ..... the leap year is dawn.
- 14)The surface area of the Earth is ..... million  $km^2$
- 15)By the ..... Northern and Eastern parts of Sri Lanka receive heavy rain.

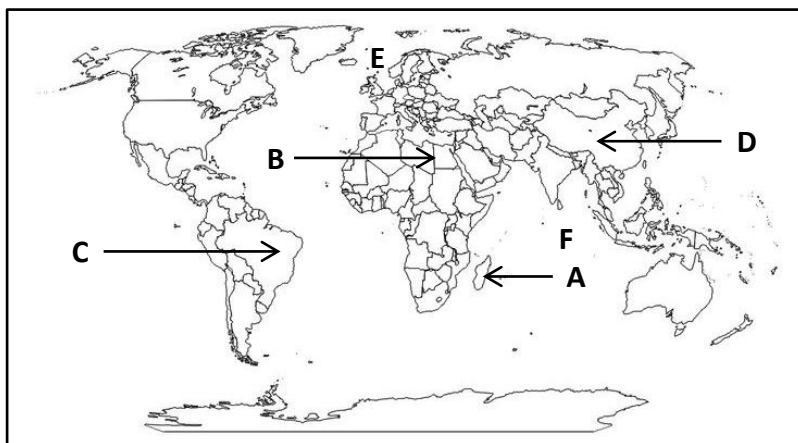
❖ **Match with suitable answers. From the question number 16 - 20**

- |  |           |
|--|-----------|
| 16)The number of South Asian Countries | Australia |
| 17)The smallest continent in the world | 7         |
| 18)The surface area of the Earth       | 12714     |
| 19)The polar diameter of the Earth     | Pacific   |
| 20)The largest ocean in the world.     | 510       |

**Part II**

- ❖ **First question is compulsory.**
  - ❖ **And write other 05 questions.**
- 

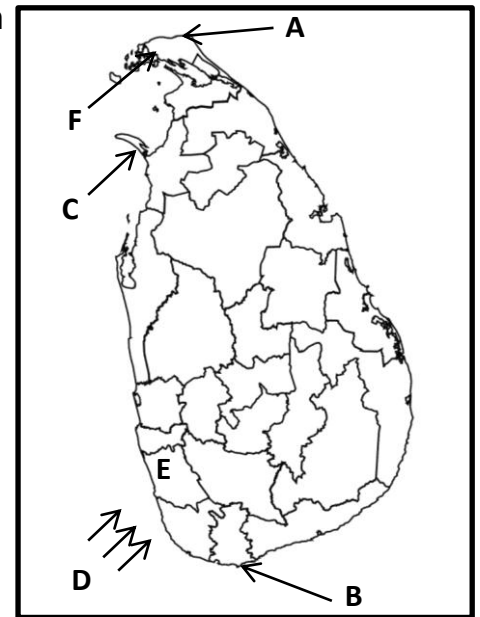
- 01)  
(A)Write answers according to the world out line map given below.



- i. Name the island is depicted by letter "A" (M 1)
- ii. Name the sea is depicted by letter "B" (M 1)
- iii. Name the countries are depicted letter "C" and "D" (M 2)
- iv. Name the longitude is depicted by letter "E" (M 2)
- v. Name the ocean is depicted by letter "F" (M 2)

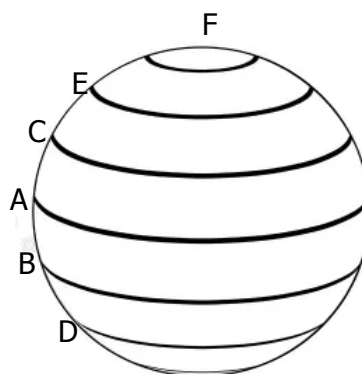
(B) Write answers according to the Sri Lankan outline map given below.

- i. The letter is depicted point of Pedro (M 1)
- ii. The district is depicted by letter "F" (M 1)
- iii. The island is depicted by letter "C" (M 2)
- iv. What is the wind type depicted by letter "D" (M 2)
- v. The district is depicted by letter "E" (M 2)



02)

- i. What is the time duration taken to rotation of the Earth. (M 2)
- ii. What is meant by longitudes. (M 3)
- iii. Name the latitudes are depicted by the letters A, B, C, D, E, F (M 5)



03)

- i. What is an island? (M 2)
- ii. Name 3 island in the Earth. (M 3)
- iii. Name 5 continents in the world. (M 5)

04)

- i. Name two months which having dry climatic condition in Sri Lanka. (M 3)
- ii. Write 3 world heritages (M 3)
- iii. Write 5 physical features can be seen in the plains in Sri Lanka. (M 5)

05)

- i. Name 2 ethnic groups are in Sri Lanka. (M 3)
- ii. Name 3 main ways which Sri Lanka gets rainfall. (M 3)
- iii. Explain briefly one of the ways of rainfall above mentioned. (M 5)

- 06)
- i. Name 2 island are belonged to south Asian region. (M 2)
  - ii. Name 3 countries are belonged to south Asia. (M 3)
  - iii. When comparing other South Asian countries in Sri Lanka educational level and health conditions are very well positions. What are the reasons for that explain briefly. (M 5)

- 07)
- i. Name 2 physical features can be seen in mountain landscape. (M 2)
  - ii. Name 3 agricultural activities in mountain landscape. (M 3)
  - iii. Explain briefly the human activities of the mountain landscape (M 5)

- 08)
- i. Name 2 features of dry zone landscape. (M 2)
  - ii. Name 3 forest reserves are in dry zone. (M 3)
  - iii. Explain briefly three special features of dry zone. (M 5)